
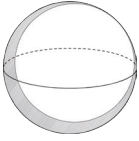

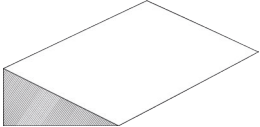
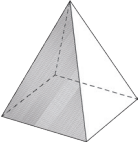
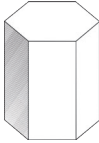
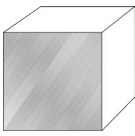
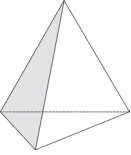

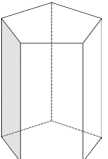




# Properties of 3D Shapes Matching Cards Bronze

## Answers

**Instructions:** Make 10 groups of five cards. Each group should have a **picture** of the **shape**, its **name** and number of **faces**, **edges** and **vertices**.

Picture	Name	Faces	Edges	Vertices
	Cone	1 and 1 curved face	1	1
	Sphere	1 curved face	0	0
	Cuboid	6	12	8
	Triangular Prism	5	9	6
	Square-Based Pyramid	5	8	5
	Hexagonal Prism	8	18	12
	Cube	6	12	8
	Tetrahedron or Triangle-Based Pyramid	4	6	4
	Hemisphere	1 and 1 curved face	1	0
	Pentagonal Prism	7	15	10