









# Identify 2D and 3D shapes

Using the word bank, write the correct name of each 2D and 3D shape below.

			
<input type="text"/>	<input type="text"/>	<input type="text"/>	<input type="text"/>
			
<input type="text"/>	<input type="text"/>	<input type="text"/>	<input type="text"/>

sphere

twinkl.com

cone

twinkl.com

rectangular  
prism

twinkl.com

square

twinkl.com

cube

twinkl.com

triangle

twinkl.com

rectangle









twinkl.com

circle

twinkl.com

# Identify 2D and 3D shapes

Using the word bank, write the correct name of each 2D and 3D shape below.

 _____	 _____	 _____	 _____
 _____	 _____	 _____	 _____
 _____	 _____	 _____	 _____
 _____	 _____	 _____	 _____

## Word Bank

sphere	kite	square-based pyramid	triangular prism
decagon	triangle	rectangle	rhombus
cone	cylinder	cube	
tetrahedron	circle	rectangular prism	

# Identify 2D and 3D shapes

Write the correct name of each 2D and 3D shape below.

 _____	 _____	 _____	 _____
 _____	 _____	 _____	 _____
 _____	 _____	 _____	 _____
 _____	 _____	 _____	 _____

## Challenge

Which of these statements are correct?

- A square is a rectangle.
- A cube has 4 faces.
- A rectangle is a square.
- A rhombus is not a parallelogram.

Explain your reasoning.

I know this because \_\_\_\_\_

\_\_\_\_\_